



UNIVERSITY OF CAMBRIDGE INTERNATIONAL EXAMINATIONS  
International General Certificate of Secondary Education

CANDIDATE  
NAME

CENTRE  
NUMBER

--	--	--	--	--

CANDIDATE  
NUMBER

--	--	--	--	--



**MATHEMATICS**

**0580/22**

Paper 2 (Extended)

**October/November 2013**

**1 hour 30 minutes**

Candidates answer on the Question Paper.

Additional Materials:      Electronic calculator  
   Tracing paper (optional)

Geometrical instruments

**READ THESE INSTRUCTIONS FIRST**

Write your Centre number, candidate number and name on all the work you hand in.

Write in dark blue or black pen.

You may use a pencil for any diagrams or graphs.

Do not use staples, paper clips, highlighters, glue or correction fluid.

**DO NOT WRITE IN ANY BARCODES.**

Answer **all** questions.

If working is needed for any question it must be shown below that question.

Electronic calculators should be used.

If the degree of accuracy is not specified in the question, and if the answer is not exact, give the answer to three significant figures. Give answers in degrees to one decimal place.

For  $\pi$ , use either your calculator value or 3.142.

At the end of the examination, fasten all your work securely together.

The number of marks is given in brackets [ ] at the end of each question or part question.

The total of the marks for this paper is 70.

This document consists of **12** printed pages.



- 1 Write the following in order of size, smallest first.

$$19\% \quad \frac{1}{5} \quad \sqrt{0.038} \quad \sin 11.4^\circ \quad 0.719^5$$

Answer ..... < ..... < ..... < ..... < ..... [2]

---

- 2 Use a calculator to work out the following.

(a)  $3(-4 \times 6^2 - 5)$

Answer(a) ..... [1]

(b)  $\sqrt{3} \times \tan 30^\circ + \sqrt{2} \times \sin 45^\circ$

Answer(b) ..... [1]

---

- 3 Find the circumference of a circle of radius 2.5 cm.

Answer ..... cm [2]

---

- 4 Bruce plays a game of golf.  
His scores for each of the 18 holes are shown below.

2	3	4	5	4	6	2	3	4
4	5	3	4	3	5	4	4	4

The information is to be shown in a pie chart.

Calculate the sector angle for the score of 4.

Answer ..... [2]

---

For  
Examiner's  
Use

3

- 5 (a) Add **one** line to the diagram so that it has two lines of symmetry.



For  
Examiner's  
Use

[1]

- (b) Add **two** lines to the diagram so that it has rotational symmetry of order 2.



[1]

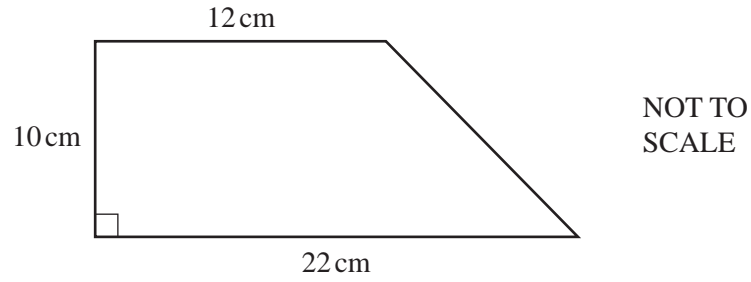
- 6 Rearrange the formula to make  $x$  the subject.

$$y = x^2 + 4$$

Answer  $x = \dots\dots\dots$  [2]

4

7



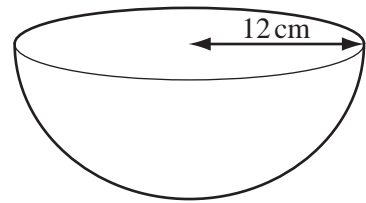
Find the area of the trapezium.

Answer ..... cm<sup>2</sup> [2]

8 A **hemisphere** has a radius of 12 cm.

Calculate its volume.

[The volume,  $V$ , of a sphere with radius  $r$  is  $V = \frac{4}{3}\pi r^3$ .]



Answer ..... cm<sup>3</sup> [2]

9 The exterior angle of a regular polygon is 36°.

What is the name of this polygon?

Answer ..... [3]

- 10 The table shows how the dollar to euro conversion rate changed during one day.

Time	1000	1100	1200	1300	1400	1500	1600
\$1	€1.3311	€1.3362	€1.3207	€1.3199	€1.3200	€1.3352	€1.3401

Khalil changed \$500 into euros (€).

How many more euros did Khalil receive if he changed his money at the highest rate compared to the lowest rate?

Answer €..... [3]

- 11 The speed,  $v$ , of a wave is inversely proportional to the square root of the depth,  $d$ , of the water.  
 $v = 30$  when  $d = 400$ .

Find  $v$  when  $d = 25$ .

Answer  $v =$  ..... [3]

- 12 A circle has a radius of 8.5 cm correct to the nearest 0.1 cm.  
 The lower bound for the area of the circle is  $p\pi \text{ cm}^2$ .  
 The upper bound for the area of the circle is  $q\pi \text{ cm}^2$ .

Find the value of  $p$  and the value of  $q$ .

Answer  $p =$  .....

$q =$  ..... [3]

13 Pam wins the student of the year award in New Zealand.  
She sends three photographs of the award ceremony by post to her relatives.

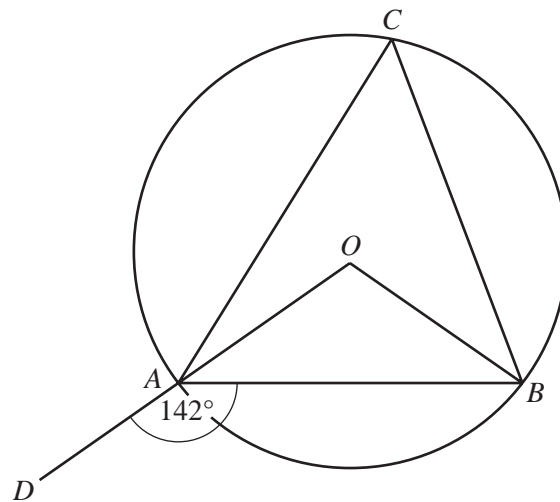
- one of size 13 cm by 23 cm to her uncle in Australia
- one of size 15 cm by 23 cm to her sister in China
- one of size 23 cm by 35 cm to her mother in the UK

Maximum lengths	Australia	Rest of the world
13 cm by 23.5 cm	\$1.90	\$2.50
15.5 cm by 23.5 cm	\$2.40	\$2.90
23 cm by 32.5 cm	\$2.80	\$3.40
26 cm by 38.5 cm	\$3.60	\$5.20

The cost of postage is shown in the table above.  
Use this information to calculate the total cost.

Answer \$ ..... [3]

14



NOT TO  
SCALE

$A, B$  and  $C$  are points on the circumference of a circle centre  $O$ .  
 $OAD$  is a straight line and angle  $DAB = 142^\circ$ .

Calculate the size of angle  $ACB$ .

Answer Angle  $ACB =$  ..... [3]

15 Find the co-ordinates of the point of intersection of the two lines.

$$2x - 7y = 2$$

$$4x + 5y = 42$$

For  
Examiner's  
Use

Answer (..... , ..... ) [3]

---

16 Solve the inequality.

$$\frac{x}{2} + \frac{x-2}{3} < 5$$

Answer ..... [4]

---

8

17

$$\mathbf{M} = \begin{pmatrix} 2 & 1 \\ 4 & 6 \end{pmatrix} \quad \mathbf{N} = \begin{pmatrix} 5 & 0 \\ 1 & 5 \end{pmatrix}$$

For  
Examiner's  
Use

(a) Work out  $\mathbf{MN}$ .

Answer(a)  $\mathbf{MN} =$  [2]

(b) Find  $\mathbf{M}^{-1}$ .

Answer(b)  $\mathbf{M}^{-1} =$  [2]

---



18  $A(5, 23)$  and  $B(-2, 2)$  are two points.

(a) Find the co-ordinates of the midpoint of the line  $AB$ .

For  
Examiner's  
Use

*Answer(a)* (..... , ..... ) [2]

(b) Find the equation of the line  $AB$ .

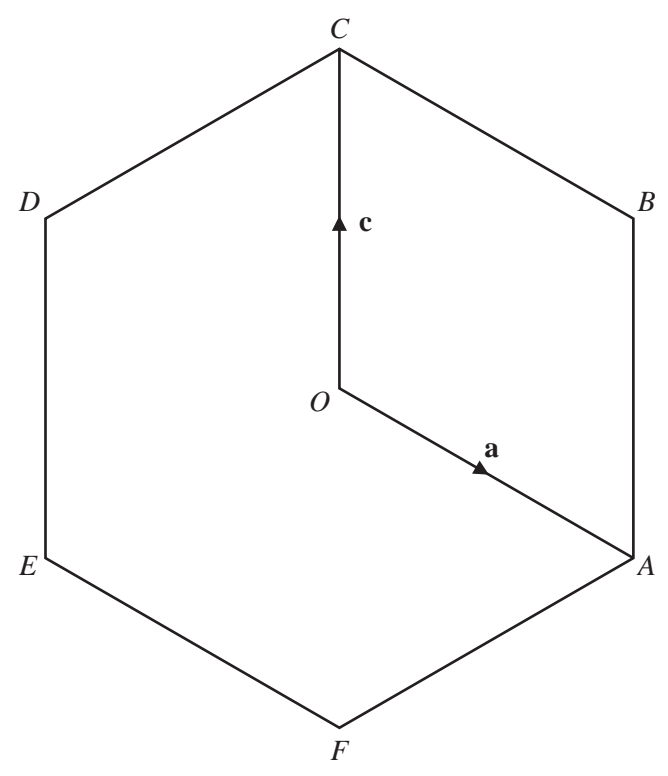
*Answer(b)* ..... [3]

(c) Show that the point  $(3, 17)$  lies on the line  $AB$ .

*Answer(c)*

[1]

---



$O$  is the origin.  
 $ABCDEF$  is a regular hexagon and  $O$  is the midpoint of  $AD$ .

$\vec{OA} = \mathbf{a}$  and  $\vec{OC} = \mathbf{c}$ .

Find, in terms of  $\mathbf{a}$  and  $\mathbf{c}$ , in their simplest form

(a)  $\vec{BE}$ ,

Answer(a)  $\vec{BE} = \dots\dots\dots$  [2]

(b)  $\vec{DB}$ ,

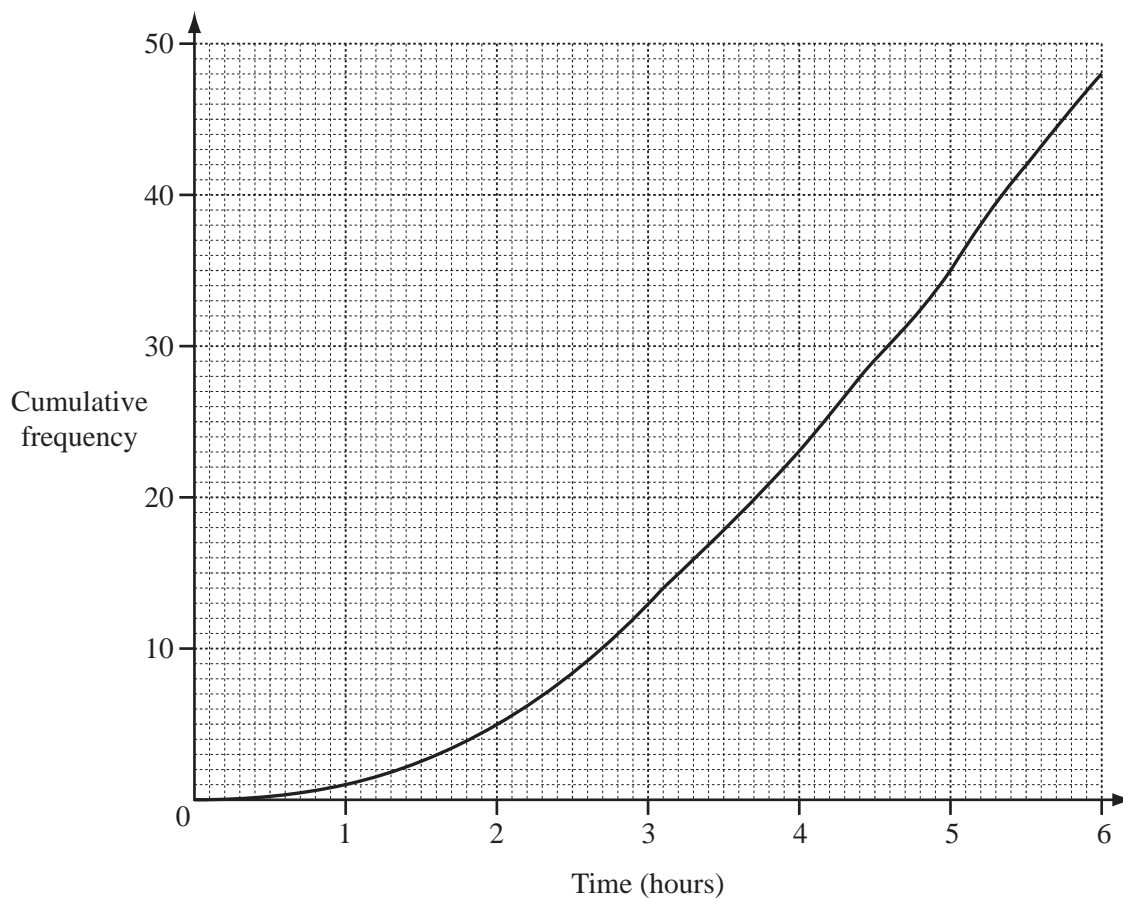
Answer(b)  $\vec{DB} = \dots\dots\dots$  [2]

(c) the position vector of  $E$ .

Answer(c)  $\dots\dots\dots$  [2]

- 20 During one day 48 people visited a museum.  
 The length of time each person spent in the museum was recorded.  
 The results are shown on the cumulative frequency diagram.

For  
 Examiner's  
 Use



Work out

- (a) the median,

Answer(a) ..... h [1]

- (b) the 20th percentile,

Answer(b) ..... h [2]

- (c) the inter-quartile range,

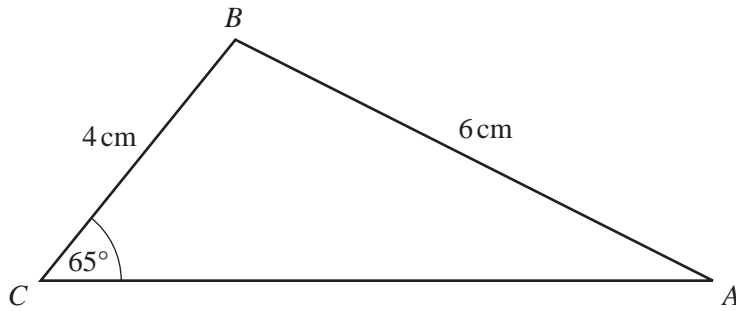
Answer(c) ..... h [2]

- (d) the probability that a person chosen at random spends 2 hours or less in the museum.

Answer(d) ..... [2]

Question 21 is printed on the next page.

21

For  
Examiner's  
UseNOT TO  
SCALE

In triangle  $ABC$ ,  $AB = 6$  cm,  $BC = 4$  cm and angle  $BCA = 65^\circ$ .

Calculate

(a) angle  $CAB$ ,

*Answer(a)* Angle  $CAB = \dots\dots\dots$  [3]

(b) the area of triangle  $ABC$ .

*Answer(b)*  $\dots\dots\dots$   $\text{cm}^2$  [3]

Permission to reproduce items where third-party owned material protected by copyright is included has been sought and cleared where possible. Every reasonable effort has been made by the publisher (UCLES) to trace copyright holders, but if any items requiring clearance have unwittingly been included the publisher will be pleased to make amends at the earliest possible opportunity.

University of Cambridge International Examinations is part of the Cambridge Assessment Group. Cambridge Assessment is the brand name of University of Cambridge Local Examinations Syndicate (UCLES), which is itself a department of the University of Cambridge.